


Name _____

Why is Nate all wet?

Read the sentences. Cut them out and paste them in order so that the story makes sense.



glue here

glue here

glue here

glue here



Nate's brother Owen picked up the hose.

Nate used the hose when he washed his mother's new car.

He forgot to turn off the hose.

Owen soaked Nate with the hose.

Name: _____

In and Out Boxes

Fill in the empty boxes.

a.


In	Out
1	3
3	
5	
7	

rule: add 2

b.

In	Out
1	
2	
5	
8	7

rule: subtract 1



c.

In	3	7	8	10
Out	1			

rule: subtract 2

d.

In	0	1	5	9
Out			10	

rule: add 5

e.

In	3	5	7	9
Out		15		

rule: add 10

f.

In	7	8	11	14
Out		4		

rule: subtract 4

Write the rule and fill in the empty boxes.

g.

In	3	5	7	13
Out	0	2	4	

rule:

h.

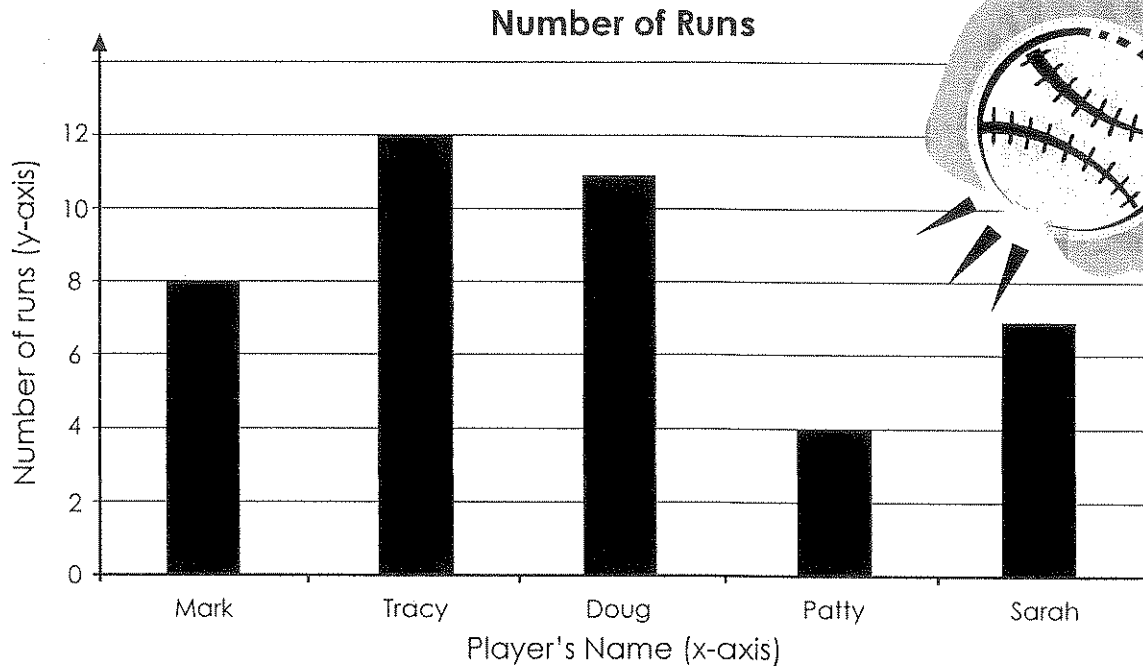
In	1	5	6	10
Out	4	8		13

rule:

Name: _____

Baseball Bar Graph

The school baseball team keeps track of how many runs each player gets. Use the graph below to answer the questions.



- How many runs did Sarah have? 1. _____
- How many runs did the player with the most runs have? 2. _____
- How many more runs did Doug have than Sarah? 3. _____
- How many fewer runs did Mark have than Tracy? 4. _____
- How many runs did Mark and Patty have? 5. _____
- Who has more runs: Mark and Doug or Tracy and Patty? 6. _____
- Which two players' runs added together are less than Tracy's? 7. _____
- Jose scores five more runs than Tracy. How many runs did he score? 8. _____
- List the players in order, from fewest runs to most runs.